



Mathe Klasse 1

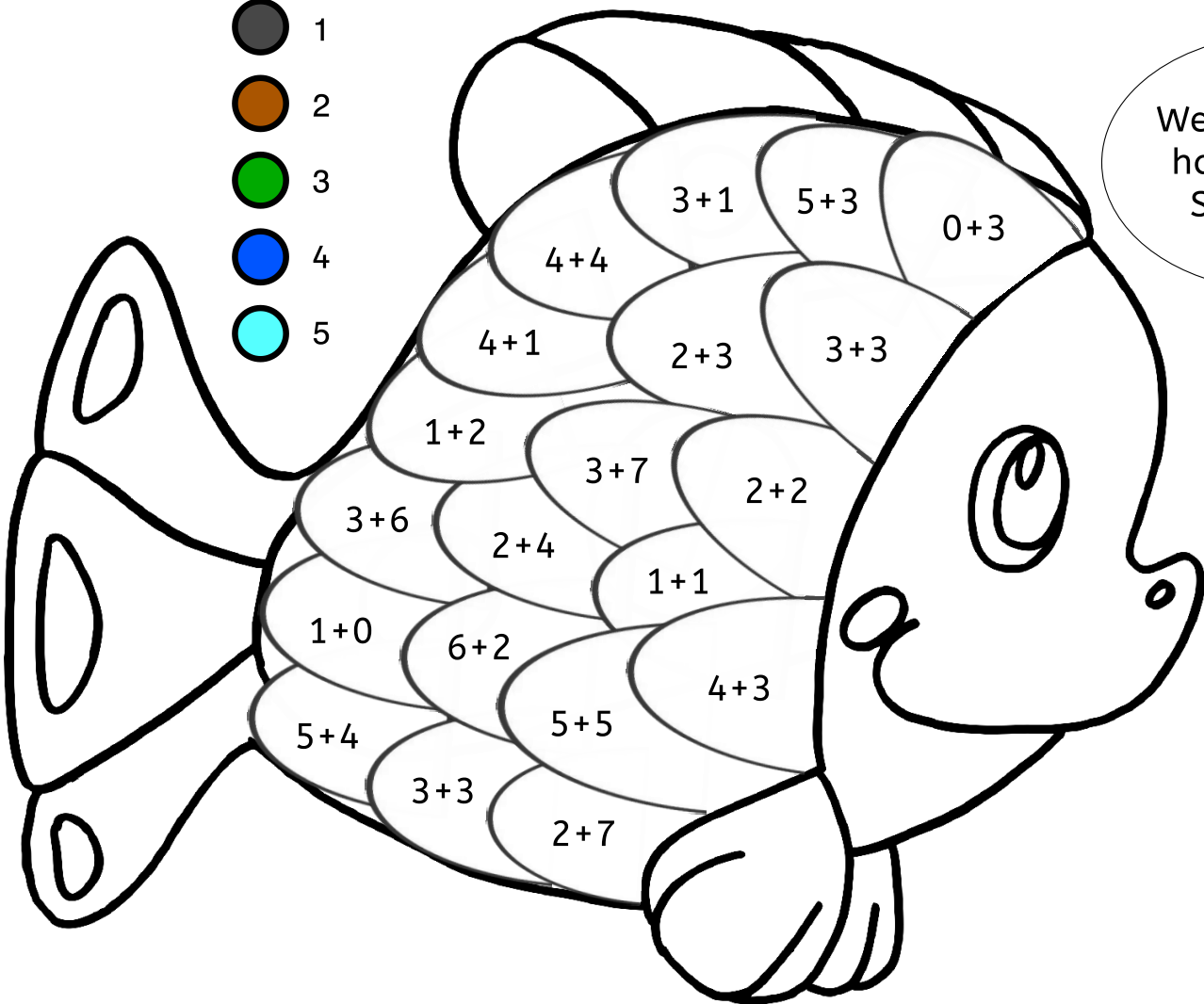
Material vom 19.03.20-27.03.20

Name: _____





Male den Fisch aus!


- 1
- 2
- 3
- 4
- 5





Welche Farben haben meine Schuppen?


- 6
- 7
- 8
- 9
- 10

11  






elf

12  



zwölf

13  






dreizehn

14  






vierzehn

15  






fünfzehn

16  






sechzehn

17  



siebzehn

18  






achtzehn

19  



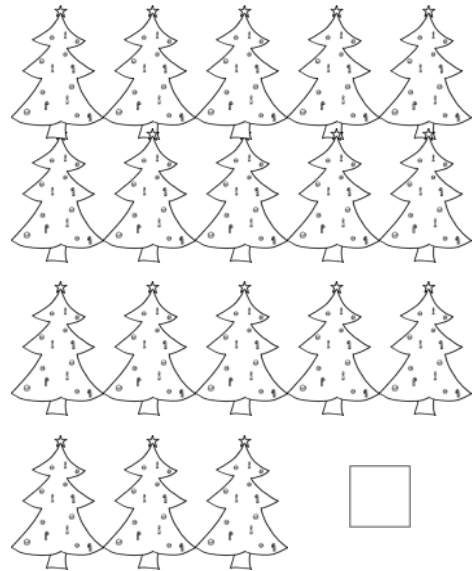

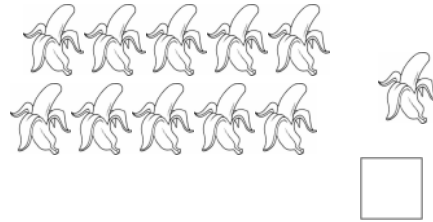
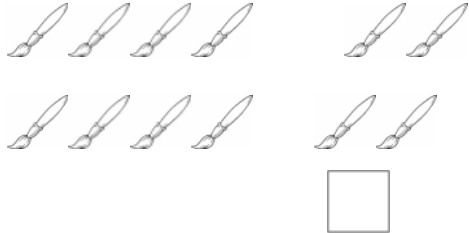

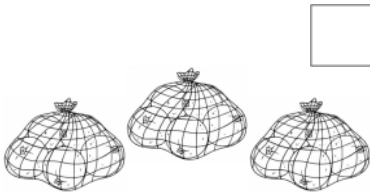
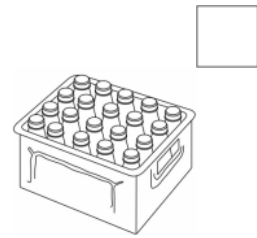
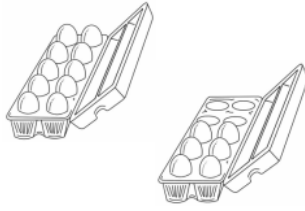
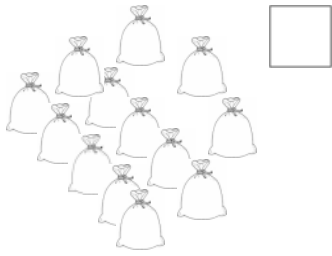
neunzehn

20  



zwanzig

Zahlen bis 20



Die Zahlen bis 20

	→	<input type="text"/>
	→	<input type="text"/>
	→	<input type="text"/>
	→	<input type="text"/>
	→	<input type="text"/>
	→	<input type="text"/>
	→	<input type="text"/>
	→	<input type="text"/>
	→	<input type="text"/>
	→	<input type="text"/>


	<input type="text"/>		<input type="text"/>
	<input type="text"/>		<input type="text"/>
	<input type="text"/>		<input type="text"/>
	<input type="text"/>		<input type="text"/>
	<input type="text"/>		<input type="text"/>

Wir schreiben die Zahlen von 10 bis 20 als Rechnung

1	1	=	1	0	+	1							1	6	=	1	0	+						
1	2	=	1	0	+	2							1	7	=									
1	3	=	1	0	+	3							1	8	=									
1	4	=	1	0	+								1	9	=									
1	5	=	1	0	+								2	0	=									

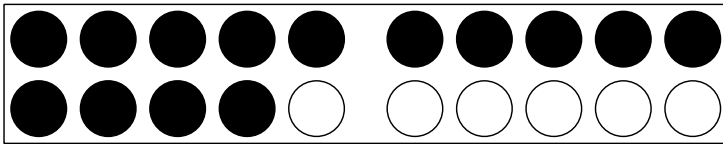
Zahlen bündeln

Beispiel:

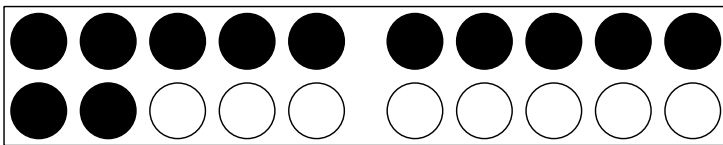


->


Z	E
1	6




Z	E



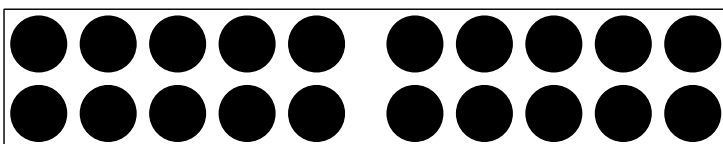
Z	E



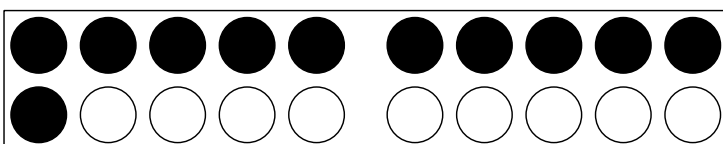
Z	E



Z	E




Z	E



Z	E

Zahlen bündeln (vergleiche im Einsternheft S. 8, 12, 13)

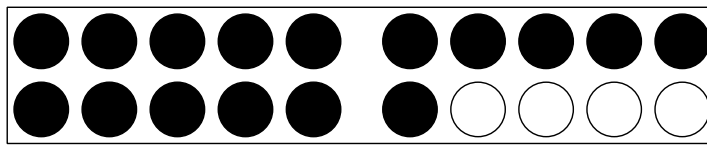


Z	E

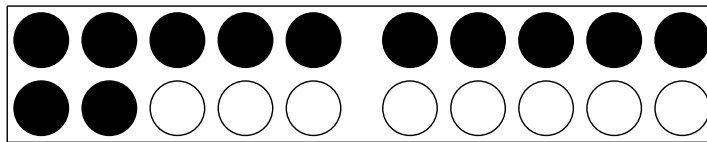


Z	E

2

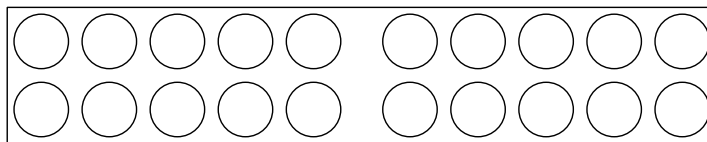


Z	E



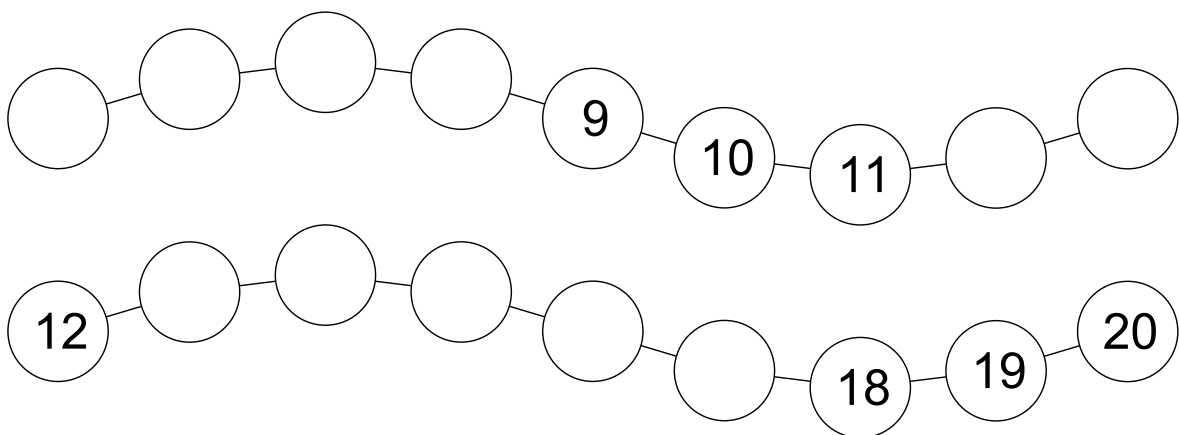
Z	E

3


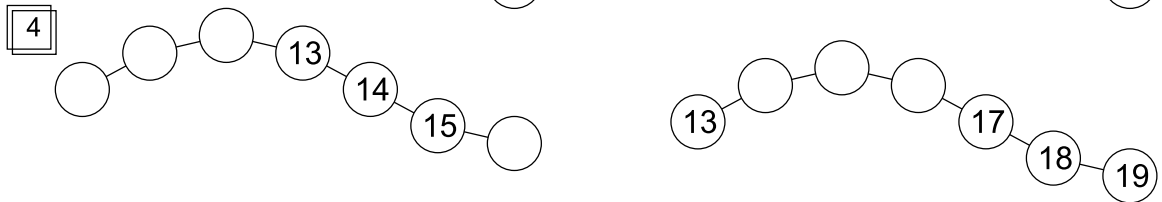

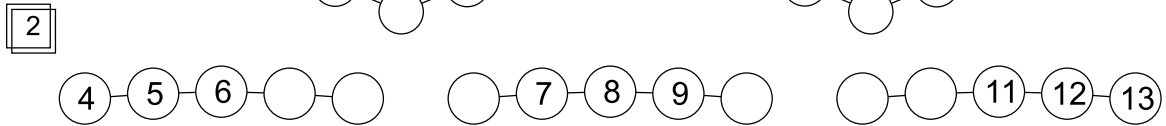
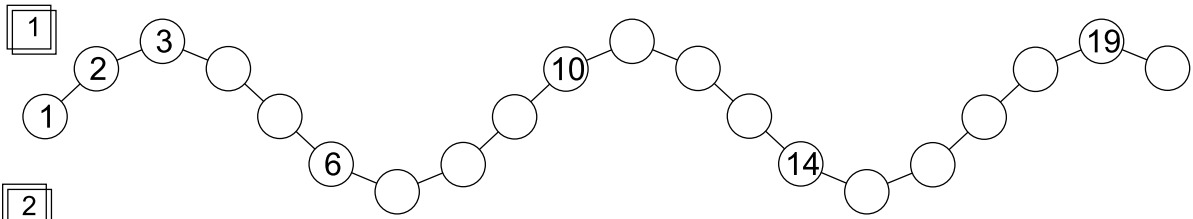


Z	E
1	8

4



Nachbarzahlen



6

	2	3						9	
	12		14			17		19	20

7

3	4	5
13	14	

6		8
16	17	

2	3	4
12		

	6	
	16	17

7	8	
		19

	3	
12		14

4		
14		

5		
	16	

		9
17		

		19

		8

	12	

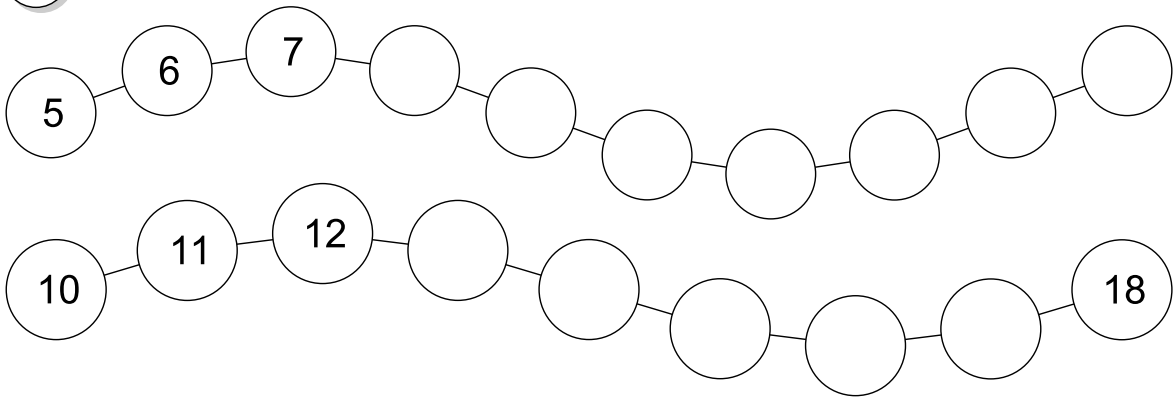
18		



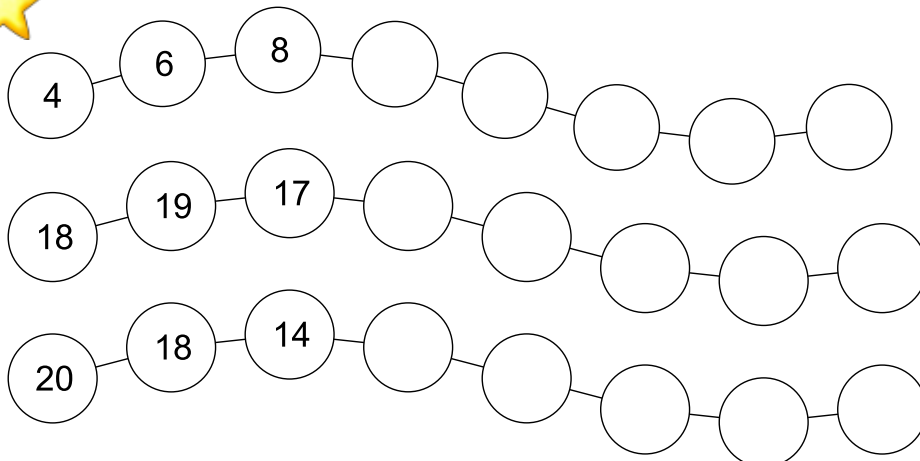
1



2



3


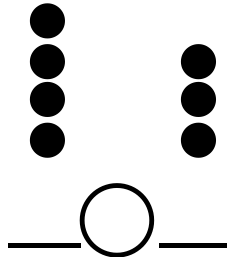



Kleiner, größer oder gleich?

Denk dran:
Kasimir frisst den
größeren Haufen!



1



2

- | | | | |
|----------------------------|---------------------------|-----------------------------|-----------------------------|
| 3 <input type="radio"/> 9 | 0 <input type="radio"/> 1 | 4 <input type="radio"/> 5 | 14 <input type="radio"/> 14 |
| 10 <input type="radio"/> 7 | 2 <input type="radio"/> 7 | 5 <input type="radio"/> 10 | <input type="radio"/> |
| 5 <input type="radio"/> 8 | 8 <input type="radio"/> 1 | 13 <input type="radio"/> 19 | 15 <input type="radio"/> 9 |
| 3 <input type="radio"/> 3 | 6 <input type="radio"/> 6 | 16 <input type="radio"/> 20 | <input type="radio"/> |

3

- | | | | |
|-----------------------------|-----------------------------|-----------------------------|-----------------------|
| 11 <input type="radio"/> 17 | 20 <input type="radio"/> 20 | 14 <input type="radio"/> 17 | <input type="radio"/> |
| 20 <input type="radio"/> 19 | 15 <input type="radio"/> 16 | 16 <input type="radio"/> 20 | <input type="radio"/> |
| 16 <input type="radio"/> 16 | 10 <input type="radio"/> 9 | 7 <input type="radio"/> 11 | <input type="radio"/> |
| 18 <input type="radio"/> 19 | 9 <input type="radio"/> 10 | 0 <input type="radio"/> 10 | <input type="radio"/> |

größer >


kleiner <

oder


gleich =



>



<







=

1 5 1 3

1 7 1 7

1 3 1 0



1 2 1 6

1 7 1 7

1 3 1 2

1 3 1 1

9 1 9

1 6 1 1

1 8 1 8

1 8 1 2

1 0 1 7

1 7 1 9

1 6 1 7

1 5 1 5

1 4 1 9

1 8 2 0

2 0 1 2



2 0 3 0

1 9 2 1

2 6 2 2

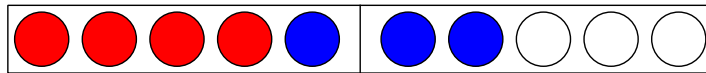
2 1 2 4

2 5 1 5

2 1 1 2

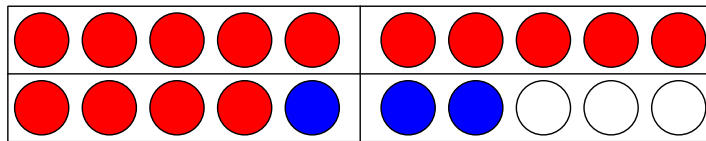
Verwandte Plusaufgaben

Kleine Aufgabe:



$$4 + 3 = 7$$

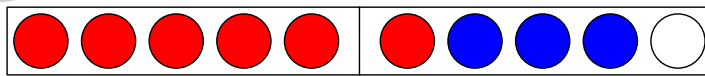
Große Aufgabe:



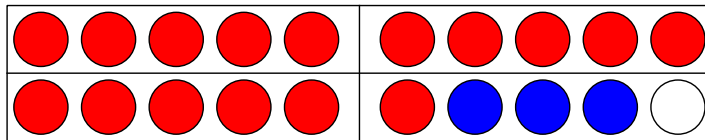
$$14 + 3 = 17$$

Ein Zehner
mehr

1.

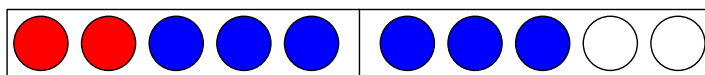


$$\square + \square = \square$$

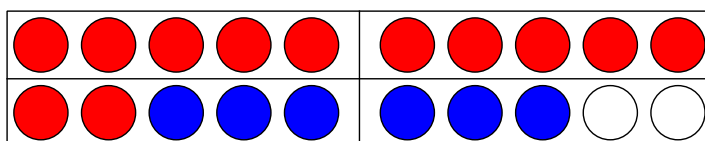


$$\square + \square = \square$$

2.



$$\square + \square = \square$$



$$\square + \square = \square$$

Kleine und große Plusaufgaben

$\square + \square = \square$

$\square + \square = \square$

$\square + \square = \square$

$\square + \square = \square$

$\square + \square = \square$

$\square + \square = \square$

$\square + \square = \square$

$\square + \square = \square$

$\square + \square = \square$

$\square + \square = \square$

$\square + \square = \square$

$\square + \square = \square$

$\square + \square = \square$

$\square + \square = \square$

$\square + \square = \square$

$\square + \square = \square$

Verwandte Plusaufgaben (benutze deine Rechenkette)


$2 + 4 = \square$	$3 + 3 = \square$	$5 + 4 = \square$
$12 + 4 = \square$	$13 + 3 = \square$	$15 + 4 = \square$
$5 + 5 = \square$	$6 + 2 = \square$	$3 + 6 = \square$
$15 + 5 = \square$	$16 + 2 = \square$	$13 + 6 = \square$
$8 - 3 = \square$	$5 - 2 = \square$	$7 - 4 = \square$
$18 - 3 = \square$	$15 - 2 = \square$	$17 - 4 = \square$
$10 - 4 = \square$	$6 - 5 = \square$	$9 - 4 = \square$
$20 - 4 = \square$	$16 - 5 = \square$	$19 - 5 = \square$

Rechne und verbinde die verwandten Aufgaben.


$6 + 4 = \square$	$7 - 3 = \square$	$2 + 7 = \square$
	$5 + 4 = \square$	$17 - 3 = \square$
$9 - 7 = \square$		$12 + 7 = \square$
	$14 - 2 = \square$	$15 + 4 = \square$
$16 + 4 = \square$		
	$19 - 7 = \square$	$4 - 2 = \square$

Du brauchst für diese Aufgabe einen Würfel!

Wir würfeln
Zwergenaufgaben...



...und finden
Riesenaufgaben.



3	+	4	=	7
---	---	---	---	---

1	3	+	4	=	1	7
---	---	---	---	---	---	---



	+		=	
--	---	--	---	--

		+		=		
--	--	---	--	---	--	--



	+		=	
--	---	--	---	--

		+		=		
--	--	---	--	---	--	--



	+		=	
--	---	--	---	--

		+		=		
--	--	---	--	---	--	--



	+		=	
--	---	--	---	--

		+		=		
--	--	---	--	---	--	--



	+		=	
--	---	--	---	--

		+		=		
--	--	---	--	---	--	--



	+		=	
--	---	--	---	--

		+		=		
--	--	---	--	---	--	--

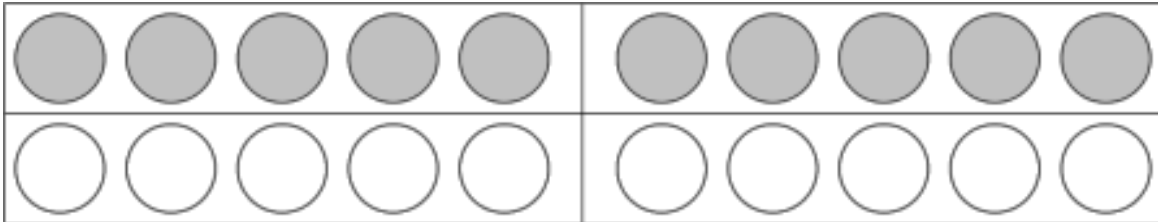


	+		=	
--	---	--	---	--

		+		=		
--	--	---	--	---	--	--



Zahlen bis 20

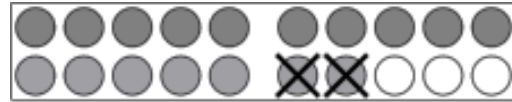


	0	+	1	=					0	+	6	=				
1	0	+	1	=					1	0	+	6	=			
	0	+	2	=					0	+	7	=				
1	0	+	2	=					1	0	+	7	=			
	0	+	3	=					0	+	8	=				
1	0	+	3	=					1	0	+	8	=			
	0	+	4	=					0	+	9	=				
1	0	+	4	=					1	0	+	9	=			
	0	+	5	=					0	+	10	=				
1	0	+	5	=					1	0	+	10	=			

Verwandte Minus - Aufgaben



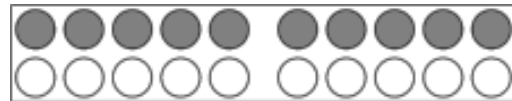
$$7 - 2 = \square$$



$$17 - 2 = \square$$



$$5 - 3 = \square$$



$$15 - 3 = \square$$



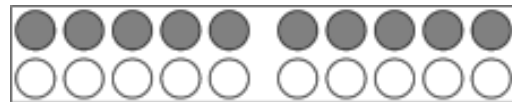
$$8 - 5 = \square$$



$$18 - 5 = \square$$



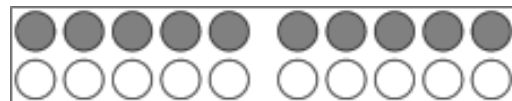
$$9 - 5 = \square$$



$$19 - 5 = \square$$



$$6 - 2 = \square$$



$$16 - 2 = \square$$



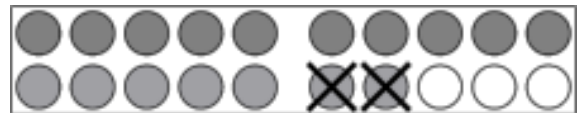
$$9 - 2 = \square$$



$$19 - 2 = \square$$



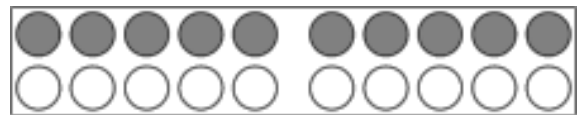
$$7 - 5 = \square$$



$$\square - \square = \square$$



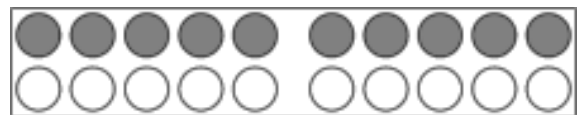
$$6 - 4 = \square$$



$$\square - \square = \square$$



$$6 - 5 = \square$$



$$\square - \square = \square$$



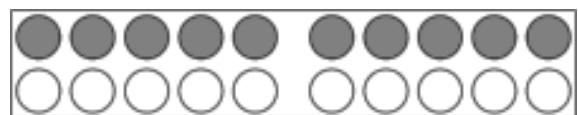
$$8 - 4 = \square$$



$$\square - \square = \square$$



$$10 - 3 = \square$$

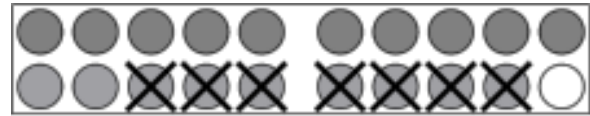


$$\square - \square = \square$$

Hilf dir mit der kleinen Aufgabe!



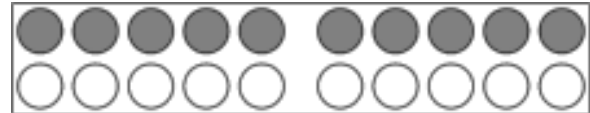
$$9 - 7 = \square$$



$$19 - 7 = \square$$



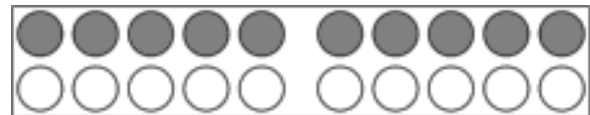
$$\square - \square = \square$$



$$13 - 2 = \square$$



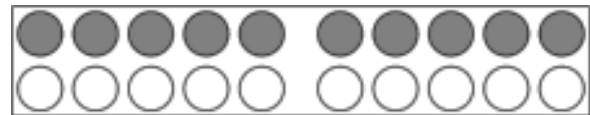
$$\square - \square = \square$$



$$16 - 3 = \square$$



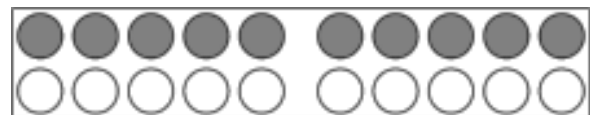
$$\square - \square = \square$$



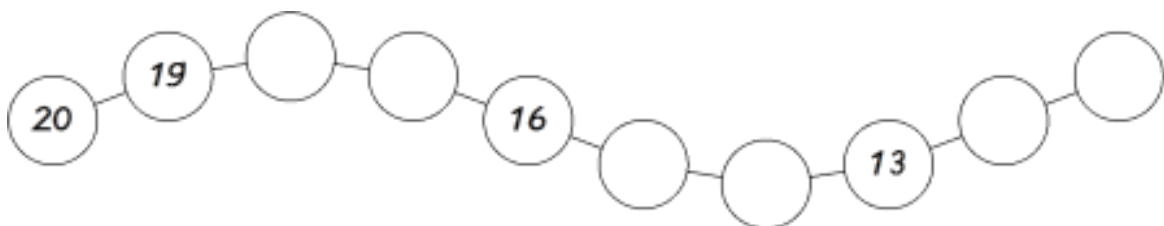
$$18 - 5 = \square$$



$$\square - \square = \square$$



$$17 - 2 = \square$$



Finde die kleine Aufgabe!

$$\square - \square = \square$$

$$16 - 3 = \square$$

$$\square - \square = \square$$

$$19 - 3 = \square$$

$$\square - \square = \square$$

$$17 - 5 = \square$$

$$\square - \square = \square$$

$$16 - 4 = \square$$

$$\square - \square = \square$$

$$12 - 1 = \square$$

$$\square - \square = \square$$

$$18 - 3 = \square$$

$$\square - \square = \square$$

$$18 - 5 = \square$$

$$\square - \square = \square$$

$$17 - 6 = \square$$

$$\square - \square = \square$$

$$19 - 7 = \square$$

$$\square - \square = \square$$

$$18 - 4 = \square$$

$$\square - \square = \square$$

$$13 - 3 = \square$$

$$\square - \square = \square$$

$$14 - 2 = \square$$

$$\square - \square = \square$$

$$17 - 4 = \square$$

$$\square - \square = \square$$

$$19 - 6 = \square$$

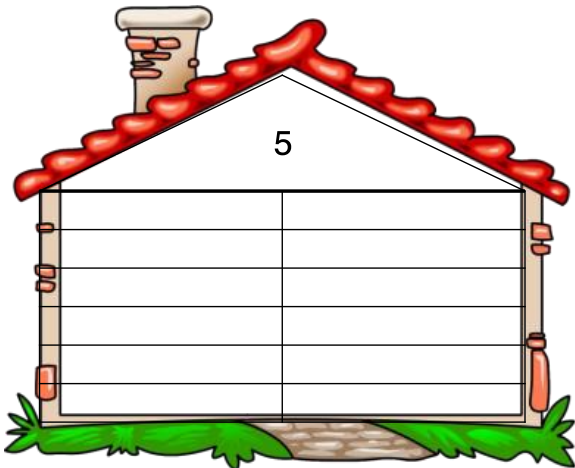

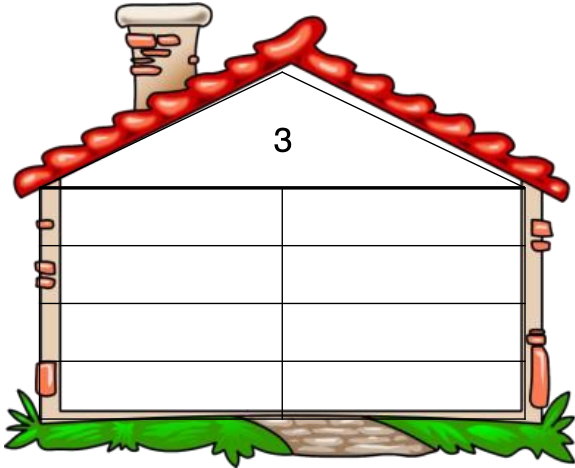
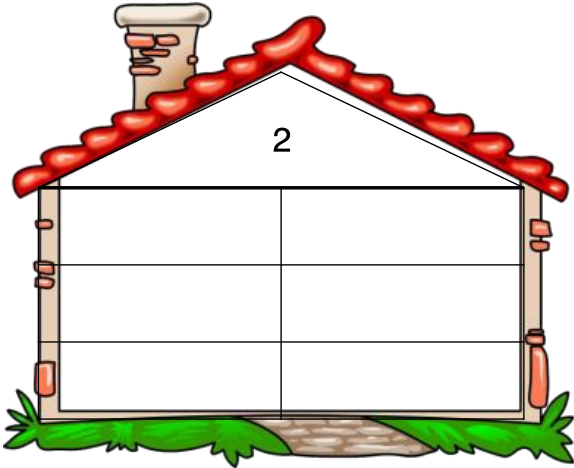
$$\square - \square = \square$$

$$16 - 2 = \square$$

$$\square - \square = \square$$

$$18 - 7 = \square$$

Wiederholung
Zahlenhäuser bis 6



Zahlenhäuser bis 10

1

5

6

8

4

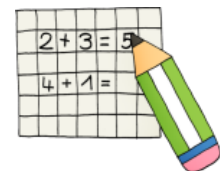
7

2

9

10

3





Schreibe die Zahlen in einer Reihenfolge auf!



11	
0	
1	
2	
3	
5	
6	
7	
8	
9	
10	
11	

13	

12	





Schreibe die Zahlen in einer Reihenfolge auf!



16

17





Schreibe die Zahlen in einer Reihenfolge auf!



18

19



Schreibe die Zahlen in einer Reihenfolge auf!



20





Urkunde

für _____

Du hast das Mathe-
Paket geschafft!

Glückwunsch!

Datum und Unterschrift
eines
Erziehungsberechtigten

